

# Cake Baking



Your mother uses two eggs when making a cake. Today she made two cakes. How many eggs did she use today?

#s

---

EQUATION

---

|   |   |   |   |   |   |   |
|---|---|---|---|---|---|---|
| x | = | ÷ | 1 | 2 | 3 | 4 |
|---|---|---|---|---|---|---|

Cut out each rectangle separately. Fold on dotted lines and make pockets. Store pieces in the numbers pocket. "Write" equation and answer in the equation pocket using the pieces.

|   |   |   |   |
|---|---|---|---|
| 1 | 2 | 3 | 4 |
|---|---|---|---|



If your mother used 4 eggs when she made 2 cakes, how many eggs does she use to make one cake?

#s

EQUATION

x

=

÷

1

2

3

4

Cut out each rectangle separately. Fold on dotted lines and make pockets. Store pieces in the numbers pocket. "Write" equation and answer in the equation pocket using the pieces.

1




2

3

4

# Cake Eating

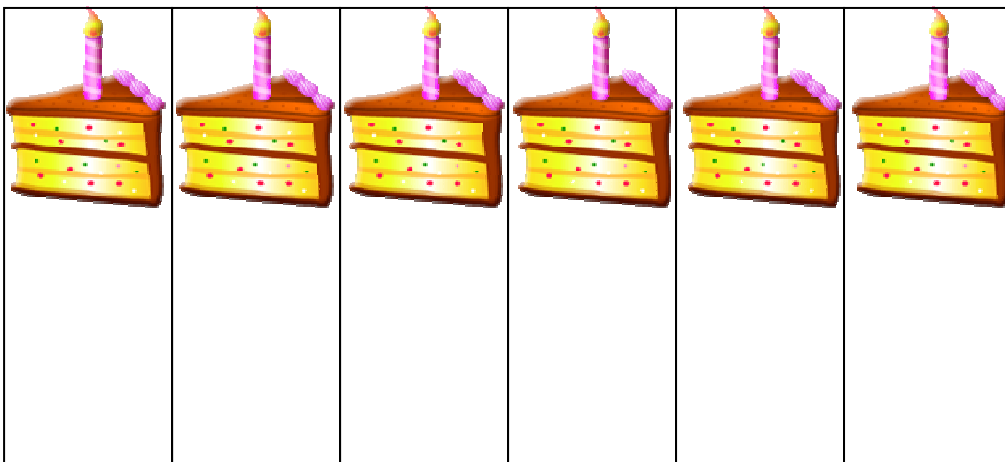
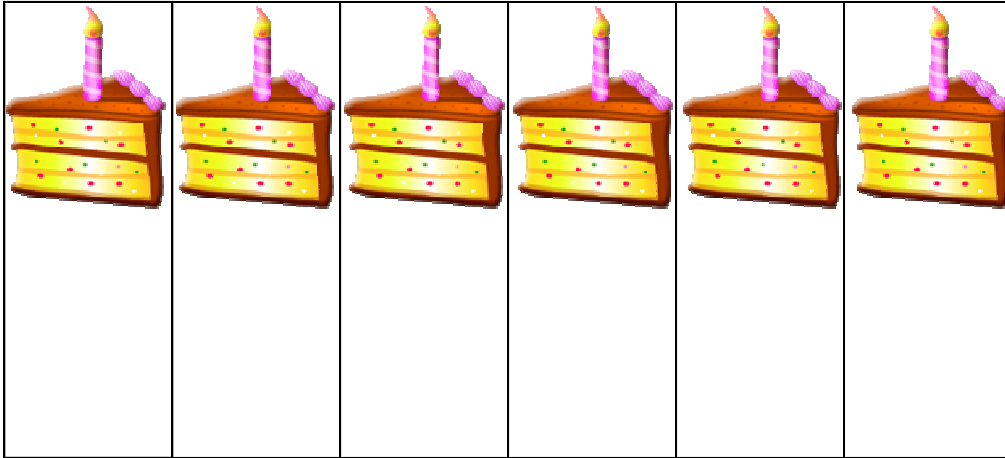
If your mom's cake was cut into 12 pieces and 4 kids were going to eat them, how many pieces of cake could each kid eat?



How many pieces of cake did each person get?

That's the answer to this:

$$12 \div 4 =$$



Cut out each rectangle on both pages except for pictures. Cut out each picture along with the box underneath it as one piece. Fold those in half and make them into pockets. Also make the cake box below into a pocket by cutting out as one piece and folding in the middle. Tape the edges or put a bit of glue along the sides to seal the pocket closed. The cake box is to store your cake pieces in.



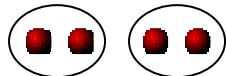
# Dividing By 2

$2 \times 2 = 4$



If I gave you 2 balls, 2 times, you would have 4 balls.

$4 \div 2 =$



Take the 4 balls and divide them into 2 groups. How many are in each group?

Dividing by two is dividing in half like you are sharing with another kid.

$3 \times 2 = 6$



$6 \div 2 =$



Draw circles to make 2 groups of balls.

$2 \times 4 = 8$

$8 \div 2 =$

$10 \div 2 =$

$12 \div 2 =$

$14 \div 2 =$

$16 \div 2 =$

$18 \div 2 =$

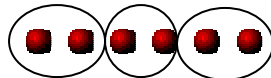
# Dividing By 3

$2 \times 3 = 6$



If I gave you 2 balls, 3 times, you would have 6 balls.

$6 \div 3 =$



Take the 6 balls and divide them into 3 groups. How many are in each group?

Dividing by three is like you are sharing with two other kids.

$3 \times 3 = 9$



$9 \div 3 =$



Draw circles to make 3 groups of balls.

$4 \times 3 = 12$

$12 \div 3 =$

$15 \div 3 =$

$18 \div 3 =$

$21 \div 3 =$

$24 \div 3 =$

$27 \div 3 =$

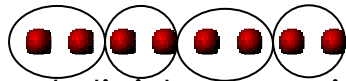
# Dividing By 4

$2 \times 4 = 8$



If I gave you 2 balls, 4 times, you would have 8 balls.

$8 \div 4 =$



Take the 8 balls and divide them into 4 groups. How many are in each group?

Dividing by four is like you are sharing with three other kids.

$3 \times 4 = 12$



$12 \div 4 =$



Draw circles to make 4 groups of balls.

$4 \times 4 = 16$

$16 \div 4 =$

$20 \div 4 =$

$24 \div 4 =$

$28 \div 4 =$

$32 \div 4 =$

$36 \div 4 =$

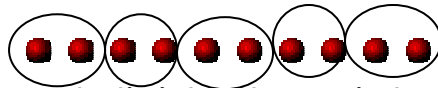
# Dividing By 5

$2 \times 5 = 10$



If I gave you 2 balls, 5 times, you would have 10 balls.

$10 \div 5 =$



Take the 10 balls and divide them into 5 groups. How many are in each group?

$3 \times 5 = 15$



$15 \div 5 =$



Draw circles to make 5 groups of balls.

$4 \times 5 = 20$

$20 \div 5 =$

$25 \div 5 =$

$30 \div 5 =$

$35 \div 5 =$

$40 \div 5 =$

$45 \div 5 =$



# Mix It Up Mix It Up

$$8 \div 4 =$$

$$12 \div 3 =$$

$$25 \div 5 =$$

$$27 \div 3 =$$

$$20 \div 4 =$$

$$18 \div 2 =$$

$$28 \div 4 =$$

$$15 \div 5 =$$

$$12 \div 2 =$$

$$18 \div 3 =$$

### Cake Baking

Your mother uses two eggs when making a cake. This time she made double the recipe so there would be LOTS. How many eggs did she use this time?

**EQUATION**

$2 \times 2 = 4$

**#s**

If your mother used four eggs when making a double cake recipe, how many eggs does she usually use to make one cake?

$4 \div 2 = 2$

**QUATION**

**#s**

## Dividing By 2

$2 \times 2 = 4$     ● ● ● ●

If I gave you 2 balls, 2 times, you would have 4 balls.

$4 \div 2 =$     ● ● ● ●

Take the 4 balls and divide them into 2 groups. How many are in each group?

Dividing by two is dividing in half like you are sharing with another kid.

$3 \times 2 = 6$     ● ● ● ● ● ●

$6 \div 2 =$     ● ● ● ● ● ●

$2 \times 4 = 8$

$8 \div 2 =$


$10 \div 2 =$                        $12 \div 2 =$

$14 \div 2 =$                        $16 \div 2 =$

$18 \div 2 =$

### Cake Eating


If your mom's cake was cut into 8 pieces and 4 kids were going to eat them, how many pieces of cake could each kid eat?



How many pieces of cake did each person get?

That's the answer to this

$8 \div 4 =$



The numbers and words have changed a little bit but this is the layout you can follow.