

GRADE 4 – INTERACTIVE ACTIVITIES

# Activity Answer Sheet for Teachers



Lesson D – Activity 1

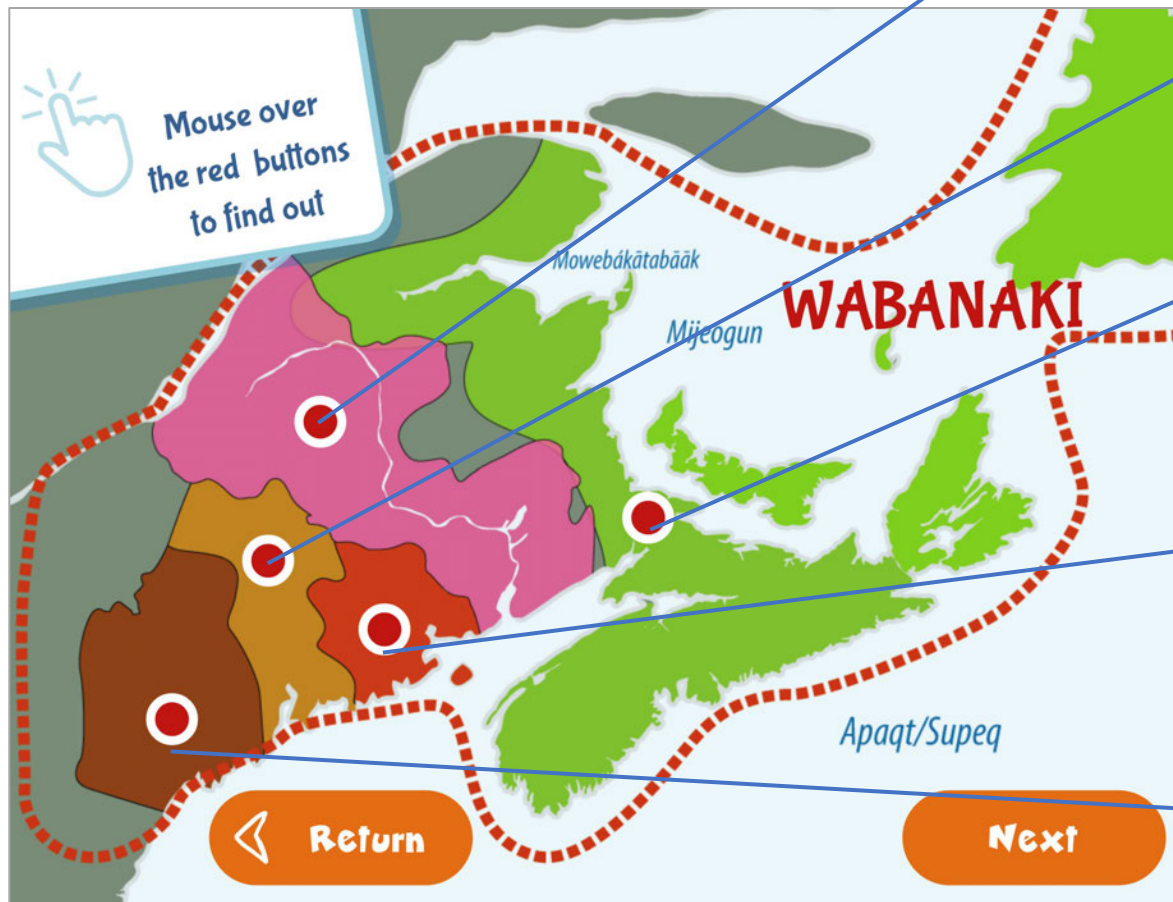
**Klu'skap** / **Keluwoskap** and His People

## QUESTION 1



## ANSWERS FOR QUESTION 1

What First Nations does the Wabanaki Confederacy include?



## QUESTION 2



## ANSWERS FOR QUESTION 2

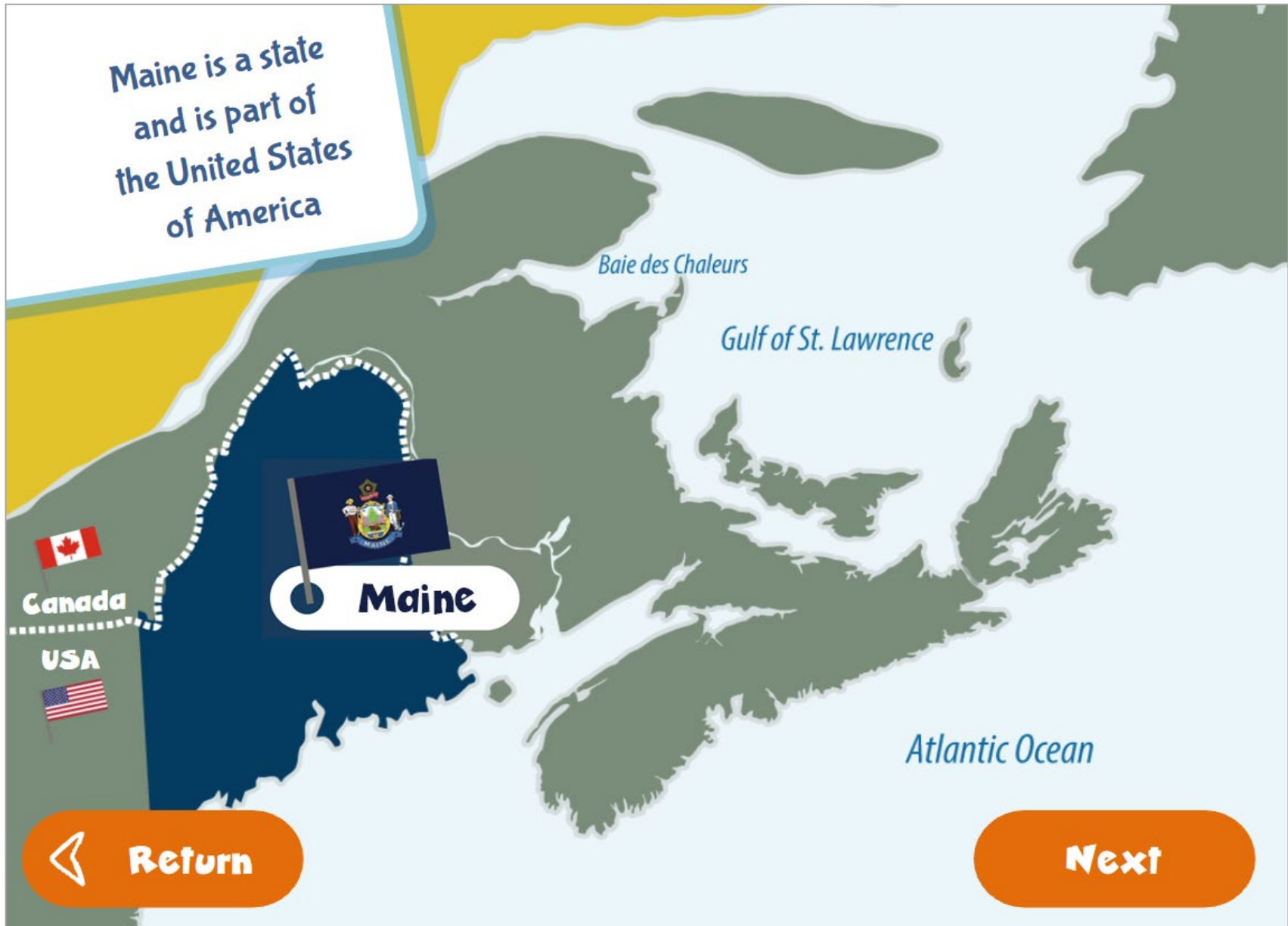
What countries are on this map?

Canada and USA

What provinces does it include?



- 1 Quebec
- 2 New Brunswick
- 3 Prince Edward Island
- 4 Nova Scotia
- 5 Newfoundland
- 6 Maine  
(State belongs to USA)



### QUESTION 3

A map of the Atlantic region of Canada. A red dashed line encloses three provinces: New Brunswick (pink), Prince Edward Island (red), and Nova Scotia (orange). To the west is the green-shaded area of Quebec, with the label 'Baie des Chaleurs'. To the east is the brown-shaded area of Newfoundland and Labrador. The 'Gulf of St. Lawrence' is labeled between the Gulf of St. Lawrence and the Atlantic Ocean. The 'Atlantic Ocean' is labeled to the south of the enclosed provinces. A callout box on the right contains a question. At the bottom left is a 'Return' button with a left-pointing arrow, and at the bottom right is an 'Answer' button.

**New Brunswick**

**Prince Edward Island**

**Nova Scotia**

*Baie des Chaleurs*

*Gulf of St. Lawrence*

*Atlantic Ocean*

**Newfoundland and Labrador**

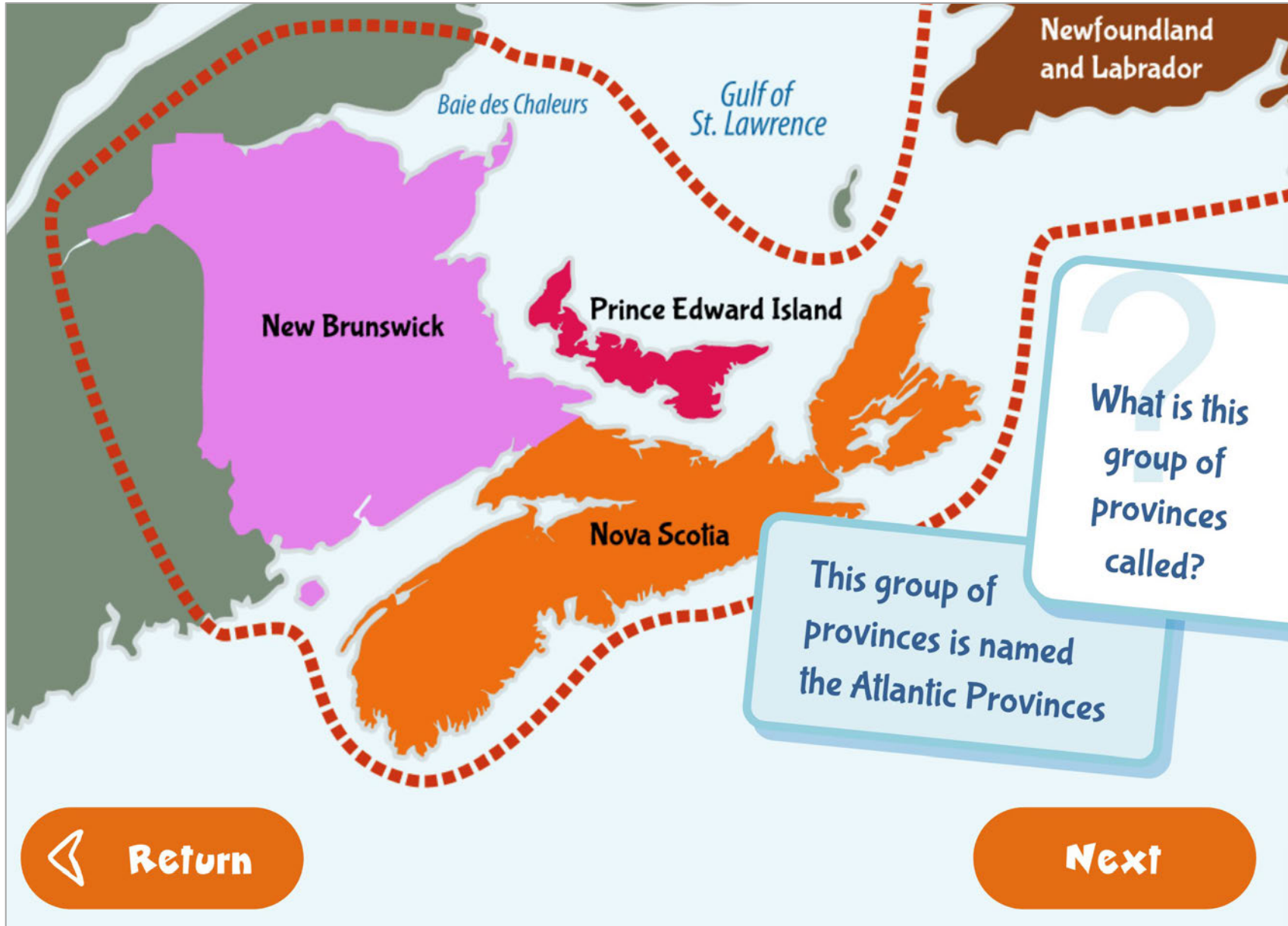
?

What is this group of provinces called?

**Return**

**Answer**

### ANSWER of QUESTION 3





## QUESTION 4

How does the border affect the two maps?  
Click on the red buttons to find out.

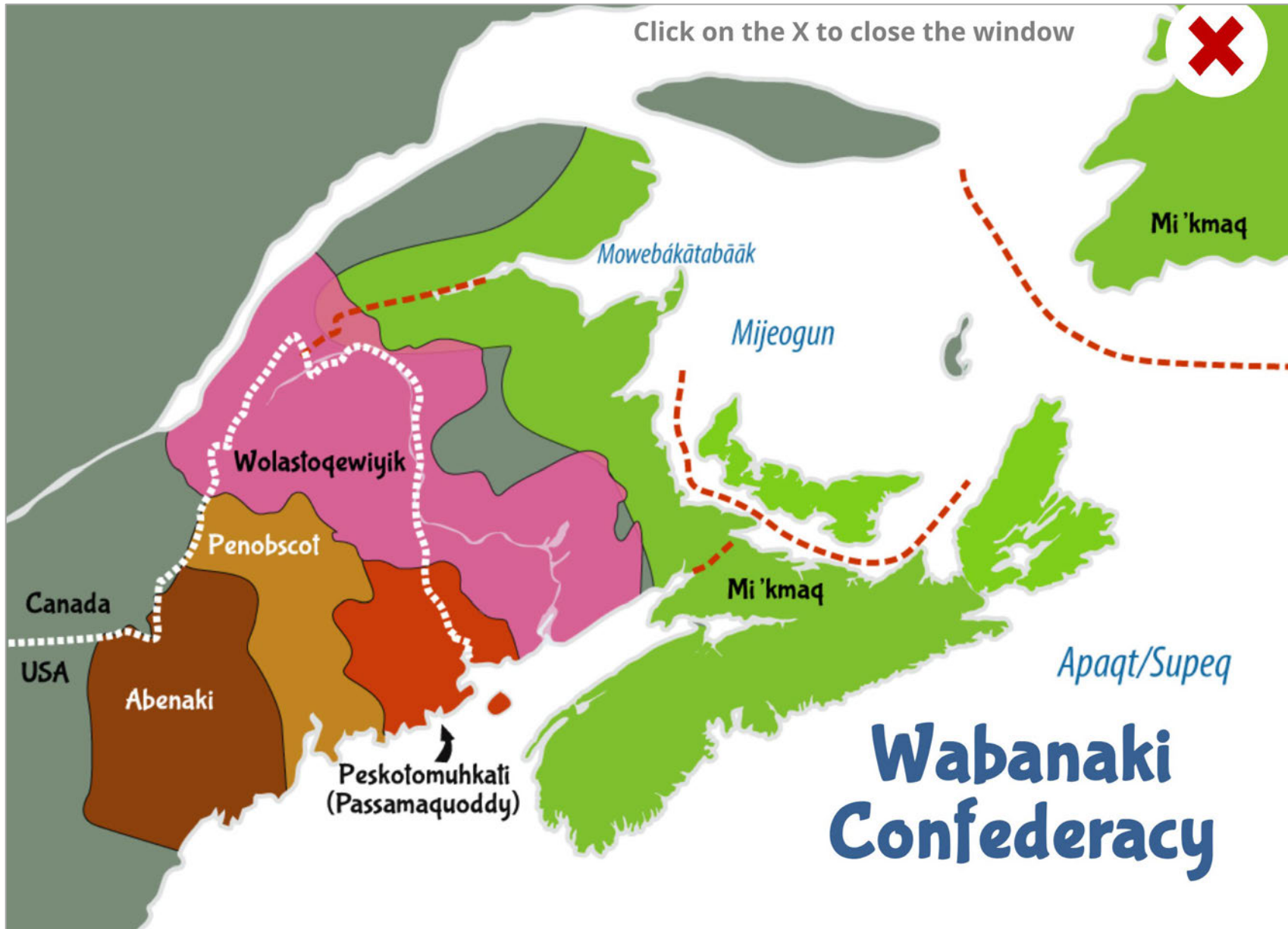
The map displays the Atlantic region of Canada, including the following areas and bodies of water:

- Bodies of Water:** Baie des Chaleurs, Gulf of St. Lawrence, and Atlantic Ocean.
- Provinces:** New Brunswick, Nova Scotia, and Newfoundland and Labrador.
- Confederacy:** Prince Edward Island.

Navigation buttons:

- Return** (orange button with left arrow)
- Wabanaki Confederacy** (red button with right arrow)
- Atlantic Provinces** (red button with right arrow)
- Next** (orange button with right arrow)

## ANSWER of QUESTION 4: Wabanaki Confederacy



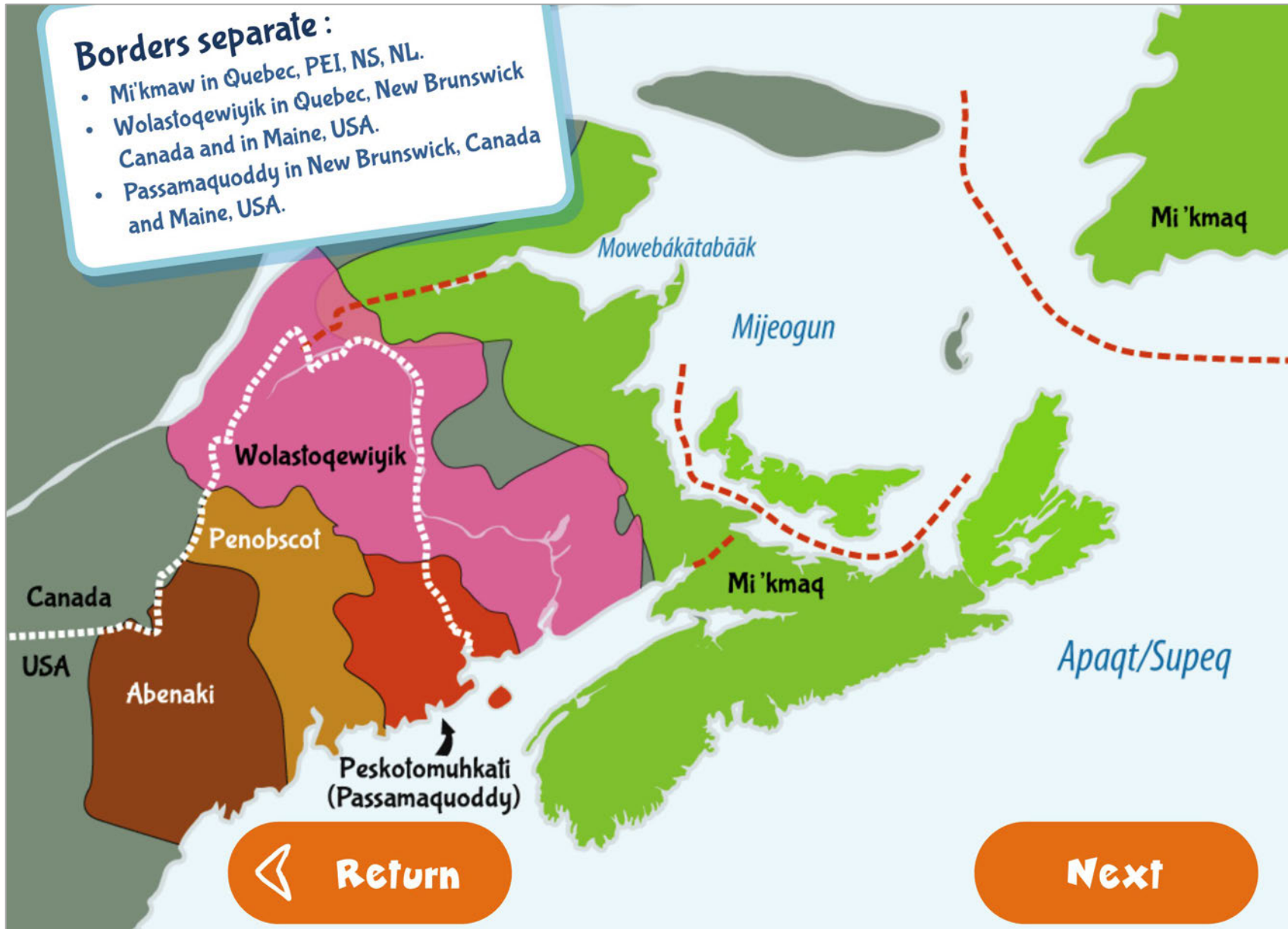
## ANSWER of QUESTION 4: Atlantic Provinces



## QUESTION 5



## ANSWER of QUESTION 5



## QUESTION 6

Why do the maps represent the same land but have different titles?

The image displays two maps of the same geographical area in Eastern Canada. The left map shows modern provincial boundaries with labels for New Brunswick, Prince Edward Island, and Nova Scotia. The right map shows traditional Indigenous territories with labels for Wolastoqewiyik, Penobscot, Abenaki, Peskotomuhkati (Passamaquoddy), Mowebákatabääk, Mijeogun, Mi'kmaq, and Apaqt/Su. A callout box with a question mark asks why the maps represent the same land but have different titles. Navigation buttons for 'Return' and 'Answer' are located at the bottom.

## ANSWER of QUESTION 6

**Borders were created in provinces, states and countries without an understanding that the Wabanaki Confederacy existed.**

The image displays two maps of the Atlantic coast of North America. The left map shows modern political boundaries for New Brunswick, Prince Edward Island, and Nova Scotia. The right map shows the traditional Wabanaki Confederacy territories, including Abenaki, Penobscot, Wolasoqewijik, Peskolomuhkali (Passamaquoddy), Mowebäkätabääk, Mijeogun, Mi'kmaq, and Apaq/Su. A callout box at the top states: "Borders were created in provinces, states and countries without an understanding that the Wabanaki Confederacy existed." Navigation buttons for "Return" and "Next" are located at the bottom.

**Return** **Next**

## QUESTION 7





## ANSWER of QUESTION 7





**Congratulations!**  
**You now know where Klu'skap lives!**

**Try again!**

